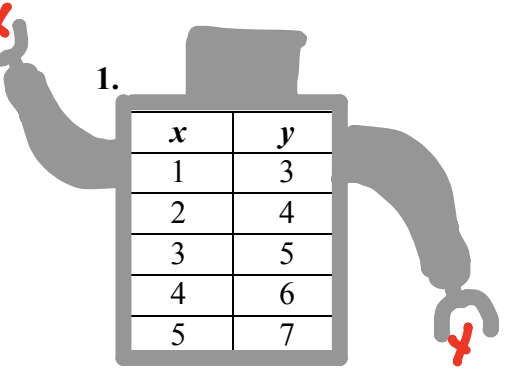


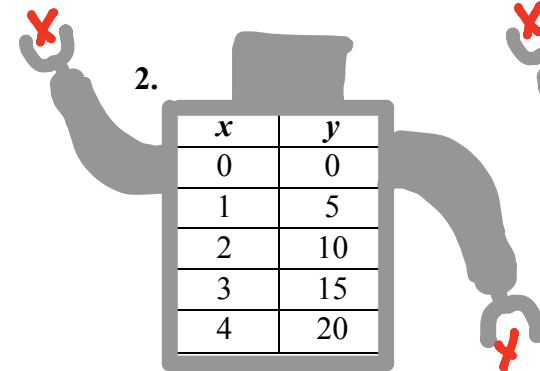
Write a rule for each table.

1.



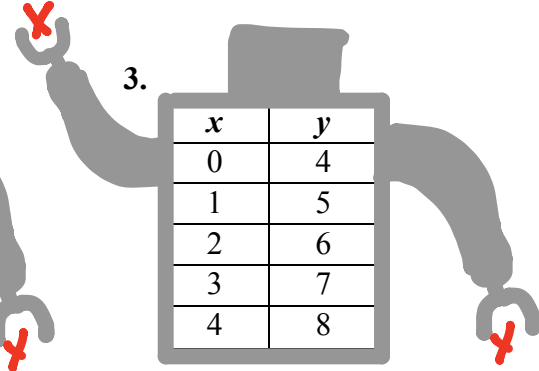
x	y
1	3
2	4
3	5
4	6
5	7

2.



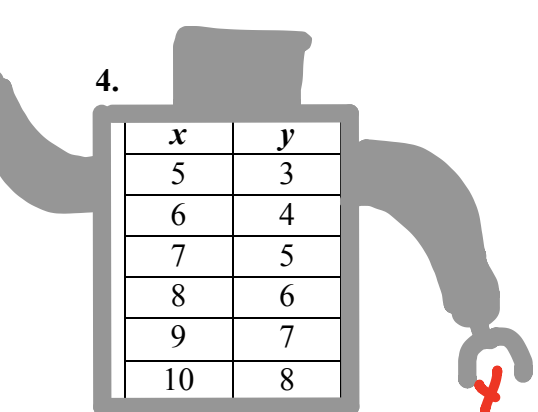
x	y
0	0
1	5
2	10
3	15
4	20

3.



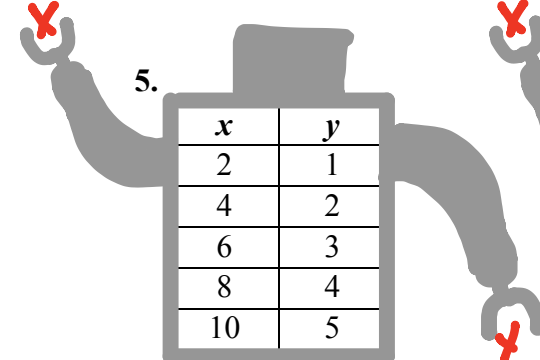
x	y
0	4
1	5
2	6
3	7
4	8

4.



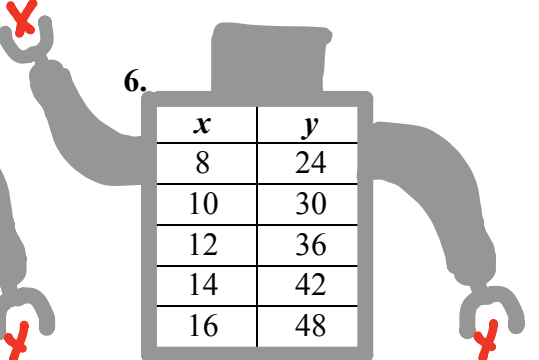
x	y
5	3
6	4
7	5
8	6
9	7
10	8

5.



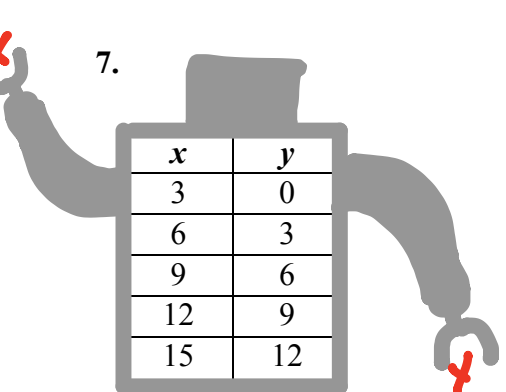
x	y
2	1
4	2
6	3
8	4
10	5

6.



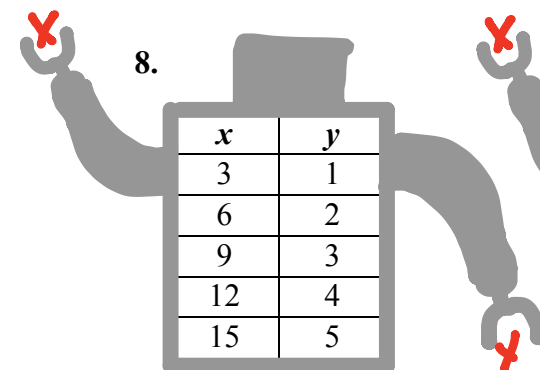
x	y
8	24
10	30
12	36
14	42
16	48

7.



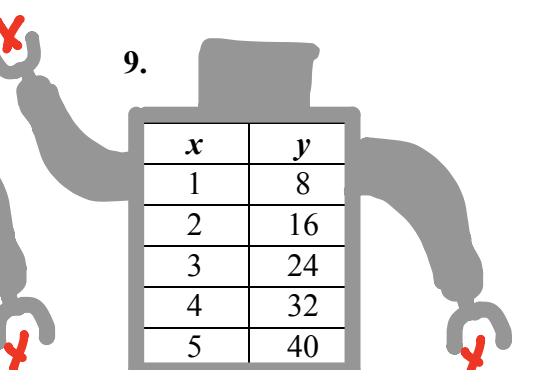
x	y
3	0
6	3
9	6
12	9
15	12

8.



x	y
3	1
6	2
9	3
12	4
15	5

9.



x	y
1	8
2	16
3	24
4	32
5	40

10.

x	y
4	1
8	2
12	3
16	4
20	5

11.

x	y
1	3
2	5
3	7
4	9
5	11

12.

x	y
2	5
4	11
6	17
8	23
10	29

13.

x	y
2	11
4	17
6	23
8	29
10	35

14.

x	y
1	6
2	14
3	22
4	30
5	38

15.

x	y
4	10
6	14
8	18
10	22
12	26

16.

x	y
20	15
16	13
12	11
8	9
4	7

17.

x	y
1	6
2	13
3	20
4	27
5	34

18.

x	y
9	4.5
10	5
11	5.5
12	6
13	6.5