

Notes and Handouts

Name : \_\_\_\_\_

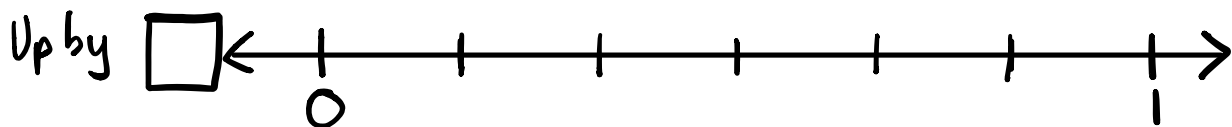
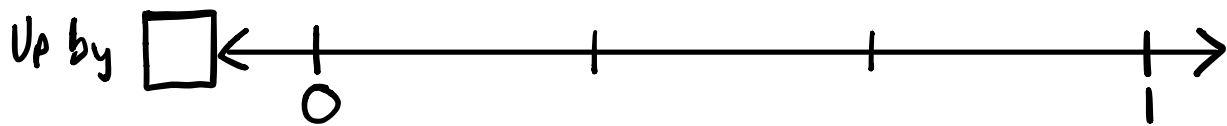
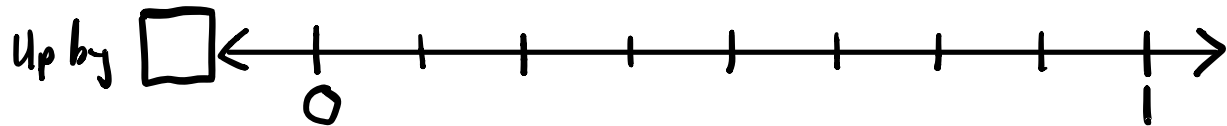

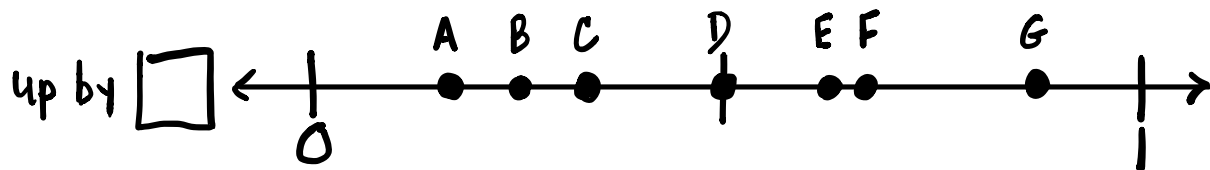
Unit:

Math6

Remember- Fractions, Decimals, Percents  
And Number Lines

Period \_\_\_\_\_

Can you tell what fractions these number lines are broken into?



Give values for each letter!

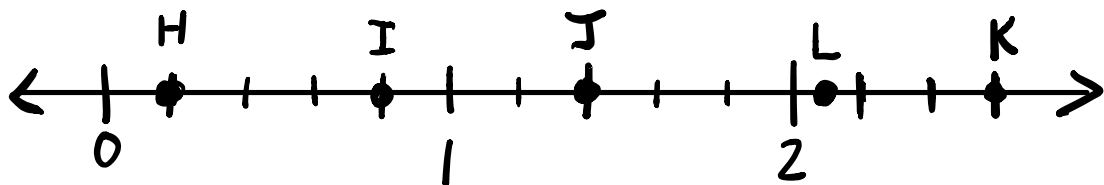
FRACTIONS  $\frac{a}{b}$

Decimals  $n.d$

Perents  $\frac{m}{100}ths$

A=	—	—	—
B=	—	—	—
C=	—	—	—
D=	—	—	—
E=	—	—	—
F=	—	—	—
G=	—	—	—

What would these letters represent on this number line?



H= \_\_\_ I= \_\_\_ J= \_\_\_ K= \_\_\_ L= \_\_\_

Remember how to convert...

fractions  $\rightarrow$  decimals  $\rightarrow$  percents  
 $\frac{n}{d}$   $\rightarrow$   $0.\underline{0}\underline{0}$   $\frac{P}{100}$

<u>Fraction</u>		<u>Decimal</u>		<u>Percent</u>
$\frac{3}{5}$	=	_____	=	_____
$\frac{4}{9}$	=	_____	=	_____
_____	=	0.12	=	_____
_____	=	0.84	=	_____
_____	=	_____	=	52%
_____	=	_____	=	76%